



**GAUTENG PROVINCE**  
EDUCATION  
REPUBLIC OF SOUTH AFRICA

**GAUTENG DEPARTMENT OF EDUCATION  
PROVINCIAL EXAMINATION  
JUNE 2017  
GRADE 10**

**MATHEMATICS  
PAPER 2**

**MEMORANDUM**

**6 pages**

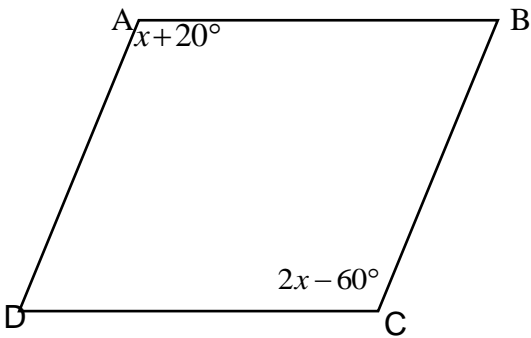
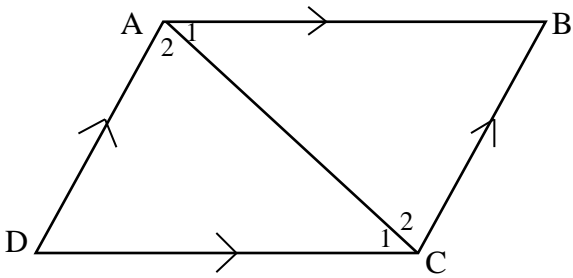
GAUTENG DEPARTMENT OF EDUCATION  
PROVINCIAL EXAMINATIONMATHEMATICS  
(Paper 2)

## MEMORANDUM

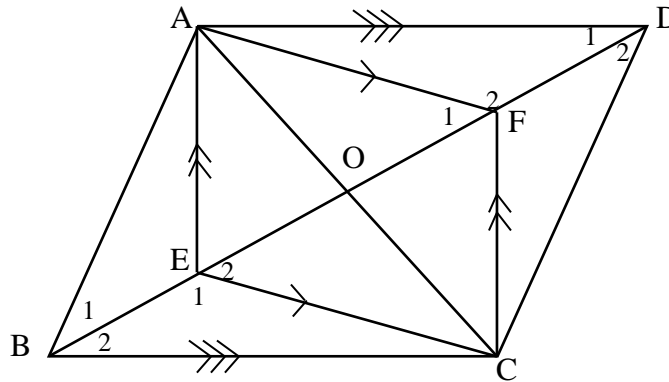
QUESTION 1			
1.1		$OP^2 = (4)^2 + (3)^2 \dots\dots Pythagoras$ $OP^2 = 25$ $OP = 5$	$\checkmark OP^2 = (4)^2 + (3)^2$ $\checkmark OP^2 = 25$ $\checkmark OP = 5$  (3)
1.2	1.2.1	$\sin \theta$ $= \frac{3}{5}$	$\checkmark$ answer  (1)
	1.2.2	$\cot \theta$ $= \frac{4}{3}$	$\checkmark$ answer  (1)
	1.2.3	$\sin^2 \theta + \cos^2 \theta$ $= \left(\frac{3}{5}\right)^2 + \left(\frac{4}{5}\right)^2$ $= \frac{9}{25} + \frac{16}{25}$ $= 1$	$\checkmark \frac{4}{5}$ $\checkmark$ answer  (2)
			[7]

QUESTION 2			
PENALISE JUST ONCE FOR INCORRECT ROUNDING-OFF.			
2.1	2.1.1	$3\sin 138,7^\circ$ $=1,980$	✓ answer (1)
	2.1.2	$\sec 50^\circ$ $=1,556$	✓ answer (1)
	2.1.3	$\frac{4 \tan^2 288,2^\circ \cdot \cos 164,6^\circ}{\sin 199,4^\circ}$ $=107,402$	✓✓ answer (2)
2.2	2.2.1	$\cos 30^\circ + \tan 60^\circ$ $= \frac{\sqrt{3}}{2} + \sqrt{3}$ $= \frac{\sqrt{3} + 2\sqrt{3}}{2}$ $= \frac{3\sqrt{3}}{2}$	✓ $\frac{\sqrt{3}}{2}$ ✓ $\sqrt{3}$ ✓ answer (3)
	2.2.2	$\frac{\sin 45^\circ}{\cos 45^\circ} - 5 \operatorname{cosec} 90^\circ + 3 \tan^2 30^\circ$ $= \frac{\sqrt{2}}{\sqrt{2}} - 5(1) + 3\left(\frac{1}{\sqrt{3}}\right)^2$ $= 1 - 5 + 3\left(\frac{1}{3}\right)$ $= -3$	✓ $\frac{\sin 45^\circ}{\cos 45^\circ} = 1$ ✓ $\operatorname{cosec} 90^\circ = 1$ ✓ $\tan 30^\circ = \frac{1}{\sqrt{3}}$ ✓ $\frac{1}{3}$ ✓ answer (5)
			[12]

QUESTION 3			
3.1	$\tan \theta = 4,96$ $\theta = 78,60^\circ$		✓ answer (1)
3.2	$2 \sin(2\theta - 10^\circ) = 1$ $\sin(2\theta - 10^\circ) = \frac{1}{2}$ $(2\theta - 10^\circ) = 30^\circ$ $2\theta = 40^\circ$ $\theta = 20^\circ$		✓ divide by 2 ✓ $30^\circ$ ✓ answer (3)
			<b>[4]</b>
QUESTION 4			
4.1			$f(x) = 2 \tan x$ ✓ shape ✓ asymptote ✓ $(45^\circ; 2)$ $g(x) = \cos x + 1$ ✓ shape ✓ x -intercept ✓ y -intercept (6)
4.2	4.2.1	1	✓ answer (1)
	4.2.2	$180^\circ$	✓ answer (1)
	4.2.3	$y \in [0; 2]$ <b>OR</b> $0 \leq y \leq 2$	✓ critical values ✓ correct brackets/ inequality (2)
			<b>[10]</b>

QUESTION 5		
5.1	Both pairs of opposite sides are parallel. All sides are equal. Diagonals bisect the angles. Diagonals bisect at right angles. Both pairs of opposite angles are equal.	✓✓ any two answers (2)
5.2		
	$\hat{A} = \hat{C}$ $x + 20^\circ = 2x - 60^\circ$ $x = 80^\circ$ $\hat{C} = 100^\circ$	Opp angles of $//^m$  ✓ statement  ✓ answer  (2)
<b>[4]</b>		
QUESTION 6		
6.1		
	Construct diagonal AC In $\triangle ADC$ and $\triangle ABC$ $AC = AC$ $\hat{A}_1 = \hat{C}_1$ $\hat{A}_2 = \hat{C}_2$ $\triangle ADC \cong \triangle ABC$ $\therefore AB = DC$ $\therefore AD = BC$	Common Alternate angles $AB // DC$ Alternate angles $AD // BC$ $s \ll$ $\triangle ADC \cong \triangle ABC$ $\triangle ADC \cong \triangle ABC$  ✓ construction  ✓ alternate angles $AB // DC$ $AB // CD$ ✓ alternate angles $AD // BC$ $AD // BC$ ✓ $\triangle ADC \cong \triangle ABC$ ✓ $AB = DC$ AND $AD = BC$  (5)

6.2



6.2.1

$$\hat{F}_1 = \hat{E}_2$$

$$\hat{F}_1 + \hat{F}_2 = \hat{E}_1 + \hat{E}_2 = 180^\circ$$

$$\therefore \hat{F}_2 = \hat{E}_2$$

Alternate angles AF//EC

Angles on straight line

✓ statement and reason  
 ✓ statement and reason  
 ✓  $\therefore \hat{F}_2 = \hat{E}_2$

(3)

6.2.2

In  $\triangle AFD$  and  $\triangle BEC$   
 $AF = EC$   
 $\hat{D}_1 = \hat{B}_2$   
 $\hat{F}_2 = \hat{E}_1$   
 $\therefore \triangle AFD \cong \triangle BEC$   
 $AD = BC$   
 $AB \parallel BC$   
 $ABCD$  is a parallelogram

Opposite sides  $//^m$ 

Alternate angles AD//BC

proved

s&lt;&lt;

 $\triangle AFD \cong \triangle BEC$ 

One pair of opp sides =//

✓ identify correct  $\triangle$   
 ✓  $AF = EC$

✓  $\therefore \triangle AFD \cong \triangle BEC$ ✓  $AD = BC$ 

✓ reason

(5)

[13]

TOTAL: 50